

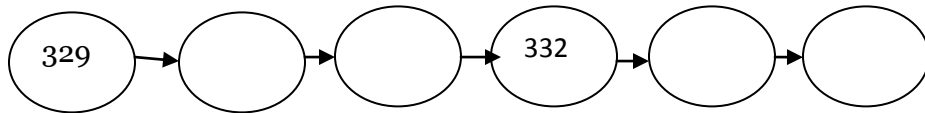


8. Add the following numbers with abacus :-

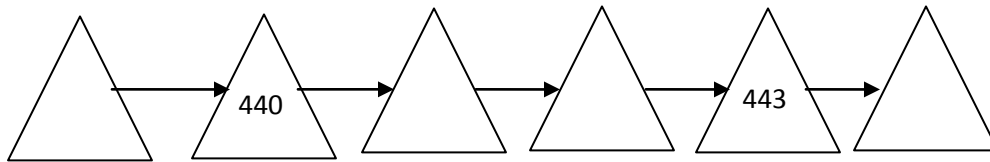
H T O	H T O	H T O	H T O	H T O	H T O
2 1 4	2 4 2	2 2 1	2 2 3	1 3 1	1 0 1
+3 2 0	+1 2 6	3 0 2	+4 3 0	+2 2 4	+2 6 2
_____	_____	_____	_____	_____	_____
_____	_____	_____	_____	_____	_____

9. Write the Missing Number :-

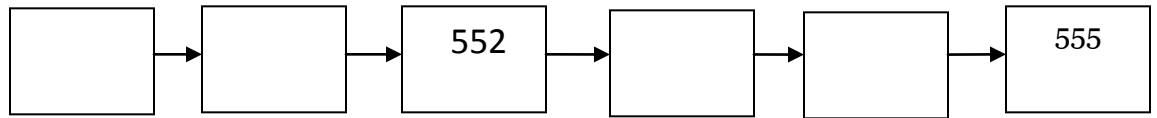
(a)



(b)



(c)



10. Fill In the Blanks :-

(a)  $536 = \underline{\quad\quad} + 30 + \underline{\quad\quad}$

(b)  $112 = \underline{\quad\quad} + \underline{\quad\quad} + \underline{\quad\quad}$

(c)  $836 = 800 + \underline{\quad\quad} + \underline{\quad\quad}$

(d)  $998 = \underline{\quad\quad} + \underline{\quad\quad} + 8$

(e)  $428 = \underline{\quad\quad} + 20 + \underline{\quad\quad}$

(f)  $321 = 300 + \underline{\quad\quad} + \underline{\quad\quad}$